



Sri Sumangala College
Panadura

ශ්‍රී සුමංගල විද්‍යාලය - පානදුර
Sri Sumangala College - Panadura

Sri Sumangala College
Panadura

ප්‍රථම වාර පරීක්ෂණය - 2020 මාර්තු
1st Term Test - March 2020

ශ්‍රේණිය }
Grade } 6

විෂයය }
Subject } Mathematics

පත්‍රය }
Paper } I,II

කාලය }
Time } 2 hours

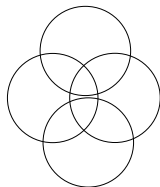
නම :-

පංතිය :-

• Answer all questions.

Part 1

01. How many circles are there in this figure ?



02. Select and underline the circular shaped objects.

(1) Wheel of bicycle

(2) A coin

(3) A Box

03. Write the following number.

Eight billion three thousand two :

04. Simplify

(1) $51 \times 1000 = \dots\dots\dots$

(2) $52000 \div 100 = \dots\dots\dots$

05. Add

$5230 + 234 + 7 = \dots\dots\dots$

06. In the number 12827,

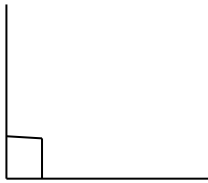
(i) Write the place value of digit 8 =

(ii) Write the place value of digit 7 =

07. Simplify

$536 \times 33 = \dots\dots\dots$

08. What is the given angle ?



09. Simplify.

Kg	g
3	225
+ 6	190
<hr/>	
<hr/>	

10. Fill in the blanks

$30000 + 0 + 100 + 20 + 5 : \dots\dots\dots$

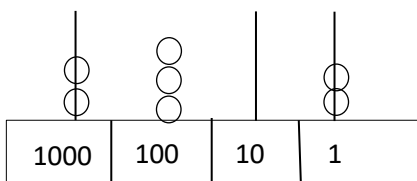
11. 105 books in a box were distributed among 7 children. How many books does one receive?

12. Write the given time in standard form in two ways.



13. Add $\frac{3}{5} + \frac{1}{5}$

14. What is the value represented in below abacus.




15. Fill in the blanks.

$100 = 4 \times \dots\dots\dots$

$100 = 5 \times \dots\dots\dots$

16. A person traveled by train 1 hour 48 minutes by train and 5 minutes by taxi. How much time did he spend on his total journey?

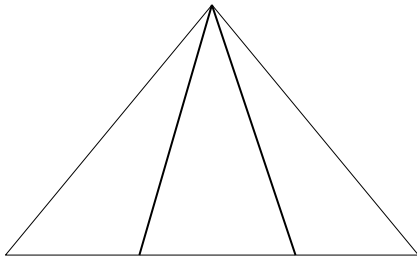
17. Colour the $\frac{1}{4}$ th of below figure.



18. Write the even numbers between 1 to 20.

19. The price of 3 oranges are Rs. 90. Find of price of 5 oranges.

20. How many triangles in this figure?

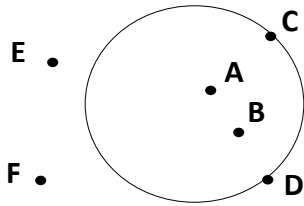


Part B

- Answer all the question.

01. (a) Write 5 circular shaped objects that can be observed in the environment.

(b)



- (i) Write two points that are in the circle.
- (ii) Write two points that are on the circle.
- (iii) Write two points that are out of the circle.

(C) Complete the following bill.

Material	Quantity	Price of 1 Kg	Value
Rice	2Kg	Rs.85.00
Chick bite	500g	Rs.260.00
Potato	1Kg 500g	Rs.300.00

When 4800 is given to the vendor, Find the balance of this bill.

02. (a) In the number 5968. Write the represented value of each digit..

- 5 =
 9 =
 6 =
 8 =

(b) Write the following numbers in standard form and words.

- (i) 5123002343:
- (ii) 620002199:

(c) Write the largest number that can be written using 2, 4, 5, 9 digits once.

03. (a).Add

$$657 + 11389 + 171 = \dots\dots\dots$$

(b) Subtract

$$7481 + 2154 = \dots\dots\dots$$

(c) Multiply.

$$47 \times 805 = \dots\dots\dots$$

(d) Divide.

$$2772/21 = \dots\dots\dots$$

(e) Fill in the blanks

a) $13 \times 100 = \dots\dots\dots$

b) $43 \times \dots\dots\dots = 430$

c) $720/10 = \dots\dots\dots$

d) $8300 / \dots\dots\dots = 83$

(04) (a) Complete the following table.

Time by 12 hour clock	Time by 24 hour clock
1.00 pm
10.23 pm
.....	13:15
.....	08:00

(b) Write 17th of July 2020 in international slandered form.

(c) Fill in the blanks

(i) 240 seconds = minutes

(ii) 110 seconds = minutes seconds

(iii) 3 Days 8 Hours = Hour

(iv) 10 hours = minutes

(v) 3 days =..... hours

05. (a) A bus takes about 30 minutes from Matara to Galle. The journey from Galle to Colombo takes another 3 hours and 20 minutes. Find the total time to take the bus from Matara to Colombo.

(b) Simplify

Minutes	Seconds
3	225
+ 6	190
<hr/>	
<hr/>	

Hours	Minutes
6	12
- 3	20
<hr/>	
<hr/>	

(c) 1 hour = minutes = Seconds