



DEPARTMENT OF EDUCATION – CENTRAL PROVINCE



Evaluation on diagnosing student performance

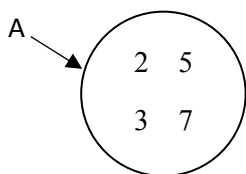
Grade 7

Mathematics

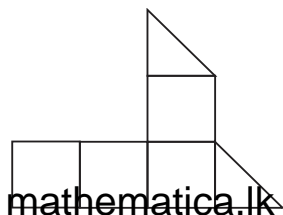
Time: 1 hour

- Answer all questions.


1. If the price of 5 apples is Rs. 625 find the price of 3 apples.
2. “The number of players in a cricket team.” Is it a constant or a variable.
3. Describe this set considering a common property.



4. If the area of one small square is 1 cm^2 find the area of the figure given below.



5. Write $x \times y \times x \times y \times x \times x$ in index notation.
6. Amal's birthday is on 2001.12.05 and Nimal's birthday is on 2004.06.03. How many years Amal elder than Nimal?
7. Compare the value of $2^3 \times 3^2$ with the value of 5^2 using the symbol $<$ or $>$.
8. There are 14 girls and 35 boys in a class. Find the ratio of girls to boys to the simplest form.
9. In which century the B.C 1564 belong.
mathematica.lk
10. Write two suitable digits to the blank space given in the three digit number 26.... which should be divisible by 3.

11. Mass of a bag with books is $7\text{ kg } 300\text{ g}$. When removes 5 books from the bag the weight is $2\text{ kg } 250\text{ g}$. What is the weight of removed books?
12. Draw an acute angle and name it as ABC.
mathematica.lk
13. Find the value of the algebraic expression $x + 12$ when $x = 3$.
14. In a picture graph  Symbol represents 8 vehicles. How many such symbols need to represent 20 vehicles. Represent that using the given symbol.
15. Find the highest common factor 12, 18, 60
16. If 100 Japanese yen is Rs. 125, what is the price of a watch worth 15000 Japanese yen in rupees?
17. Simplify $3 + 2 \times 4 - 4$
18. Draw a figure which has 3 symmetrical axes and draw its axes of symmetry.
19. Simplify $750\text{ g} + 350\text{ g} + 250\text{ g}$ and write the answer in Kg and g .
20. Draw a line PQ parallel to the given line AB by using a straight edge and a setsquare.

A ————— B

PARCEL NO



LOL.1k
BookStore

විභාග ඉලක්ක පහසුවෙන් ජයගන්න

ඕනෑම තොරතුරු ඉක්මනින්
නිවසටම ගෙන්වා ගන්න



කෙටි සටහන් | පසුගිය ප්‍රශ්න පත්‍ර | වැඩ පොත් සඟරා | O/L ප්‍රශ්න පත්‍ර |
A/L ප්‍රශ්න පත්‍ර | අනුමාන ප්‍රශ්න පත්‍ර | අතිරේක කියවීම් පොත් |
School Book ගුරු අතපොත්



pesuru
Presthena Private Ltd.

Akura Pilot



පෙර පාසලේ සිට උසස් පෙළ දක්වා සියළුම ප්‍රශ්න පත්‍ර,
කෙටි සටහන්, වැඩ පොත්, අතිරේක කියවීම් පොත්, සඟරා
සිංහල සහ ඉංග්‍රීසි මාධ්‍යයෙන් හෙදරටම හෙත්වා ගැනීමට

www.LOL.lk වෙබ් අඩවිය වෙත යන්න